

# D.A.V. Public School, Cantt. Area, Gaya

## Deepawali and Chhath Holiday's Homework





























Class – 3

### SUBJECT: ENGLISH

1. Change into many - knife, wolf, monkey, woman, diary
2. Frame five sentences using the following prepositions - in, on, under, beside, over
3. Write five lines about how you celebrate Deepawali. Also write few lines about the precautions we should take during bursting crackers. (in homework notebook)
4. Make a beautiful Deepawali card.
5. Do the following spelling activity.

Spelling Activity

Write the beginning blend or letter below each picture. Add them together to make a word. The first one has been done for you.

a.					=	shade
b.					=	
c.					=	
d.					=	
e.					=	
f.					=	
g.					=	



### विषय- हिंदी



1. सूखी पत्तियों, पेंसिल के छिलके के प्रयोग से दीपावली के लिए एक सुंदर ग्रीटिंग कार्ड बनाइए।
2. “यदि मैं नन्ही- सी चिड़िया होती /होता”- इस विषय पर पांच वाक्य लिखिए।
3. सुबह की सैर और व्यायाम के दो फायदे लिखिए।
4. आप अपनी जेब में क्या-क्या रख सकते हैं? कोई चार नाम लिखकर उनके चित्र बनाइए।



## SUBJECT: MATHS




1. Write the name of 5 things which can be measured in litre.
2. Draw and colour any 5 things which can be measured in length. (on a small chart paper)
3. Make a model of any one thing which can be measured in weight.
4. Solve the given puzzles.

USE YOUR MATH SKILLS TO FIND THE VALUE OF EACH '?'


 ×  = 100

 -  = 4

 -  = 4


 +  +  = ?

1) Write the numbers 2, 3, 5, 6 and 7 in the correct place so that each line of the cross adds up to 15.

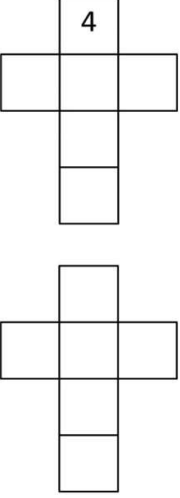
2 3 5 6 7 

Total must be 15

2) Write the numbers 2, 3, 4, 5, 6 and 7 in the squares so that each line of the cross adds up to 17.

2 3 4 5 6 7 

Total must be 17



## SUBJECT: SCIENCE

1. Write the name of -a) two seeds which can be eaten \_\_\_\_\_  
b) two roots eaten as food \_\_\_\_\_
2. Write the name of any 5 sources of water.
3. Make a model of any one source of water.

## SUBJECT: SOCIAL SCIENCE

1. Draw the picture of magnetic compass and write three lines about it.
  2. Find out the price of the following in your city-  
a) Petrol      b) Diesel
  3. List down three important things that must be kept in mind while travelling.
  4. Name the four cardinal directions and one state of India in each direction.
-